



INDIAN SCHOOL AL WADI AL KABIR
DEPARTMENT OF MATHEMATICS (2022 – 2023)

TOPIC: TENS AND ONES

WORKSHEET - 10

RESOURCE PERSON: SUNITA S BHADRA

NAME: _____


CLASS: I

SEC: _____

DATE: _____

Count and write as Tens and Ones.

a.



T O

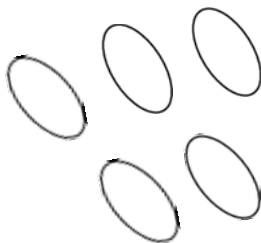

10 = _____ ten and _____ ones

= _____ + _____

= _____

= Ten

b.



T O

15 = _____ ten and _____ ones

= _____ + _____

= _____

= Fifteen